

Cursive Writing Worksheets: Sentences

Write the sentences:

A long trip begins with a single step.

A long trip begins with a single step.

To have a good friend, be a good friend.

To have a good friend, be a good friend.

Mistakes are proof that you are trying.

Mistakes are proof that you are trying.

Shoe

Shack

Shed

Sharp

Shout

Shield

Short

Shack

Ship

Shoulder

Shelf

Shape

Shell

Shelter

Shamrock

Shirt

✓ Using copies or sheets of paper, cover these items and see how many sheets/ copies it takes for them for them to be fully covered, and write it down: a table, your bed, a towel, a couch.

Table = $7\frac{1}{2}$ to cover

Pillow case = 4 to cover

Laptop = 1 to cover

My goal is to learn that area is how much space a surface takes up.




A Warm-up. Listen to your teacher. How many? How many copies will you need to cover your desk?

Measured using:	Object being measured:	Estimate:	Number used:
Copies	Desk		
Maths books	Desk		



Area

Area is how much space a surface takes up. We measure area in squares.



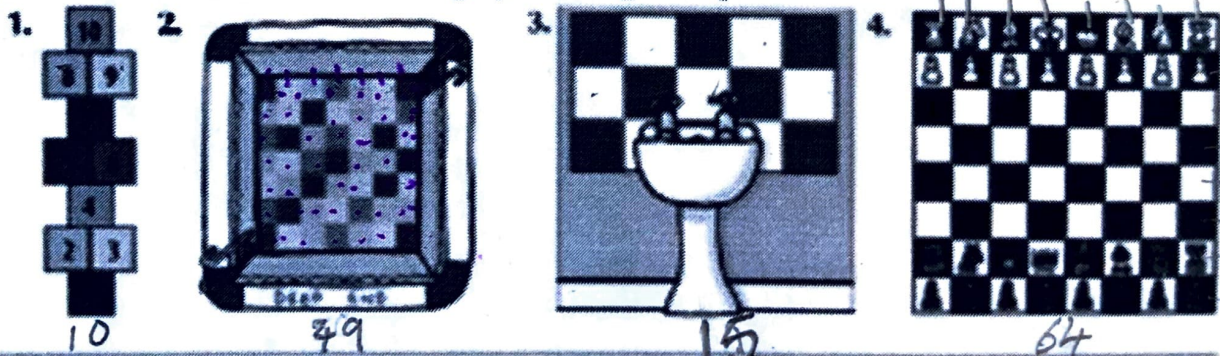
This yellow shape has an area of 8 squares.

B Area.

- Which one of the pictured items would have the greatest area? *house*
- Which would have the smallest area? *Stamp*
- Number them in order starting with the smallest area.



C Measure the area of the following by counting the squares.



D What is the area of the top of this table? (Be careful, not all of it is tiled!)
Tip: The wooden rim is 1 square wide.



1. Southeast Asia

2. because they are nomadic.

3. By hunting.

4. boomerangs.

5. spirits being.

6. by leaving painting and carvings.

7. They shared heritage and culture.

Saturday is the best day of the Week
- Agree

• Because i can do any-thing.

• Its realaxing and I have a movie Night.

• I dont get home Work.

Every child should have a mobile phone - Disagree.

- Because some times you might break it.
- Its not good to stay on your phone to long.
- I think playing with electronics is fun but some times dangerous.

I Agree With mum because iguanas are very big and i don't think Alex Will be able to take care of it.



Finding the area in squares

To find the area of the red shape:


1. Count the full squares. **20**
2. Count the half squares. **4**

Remember:

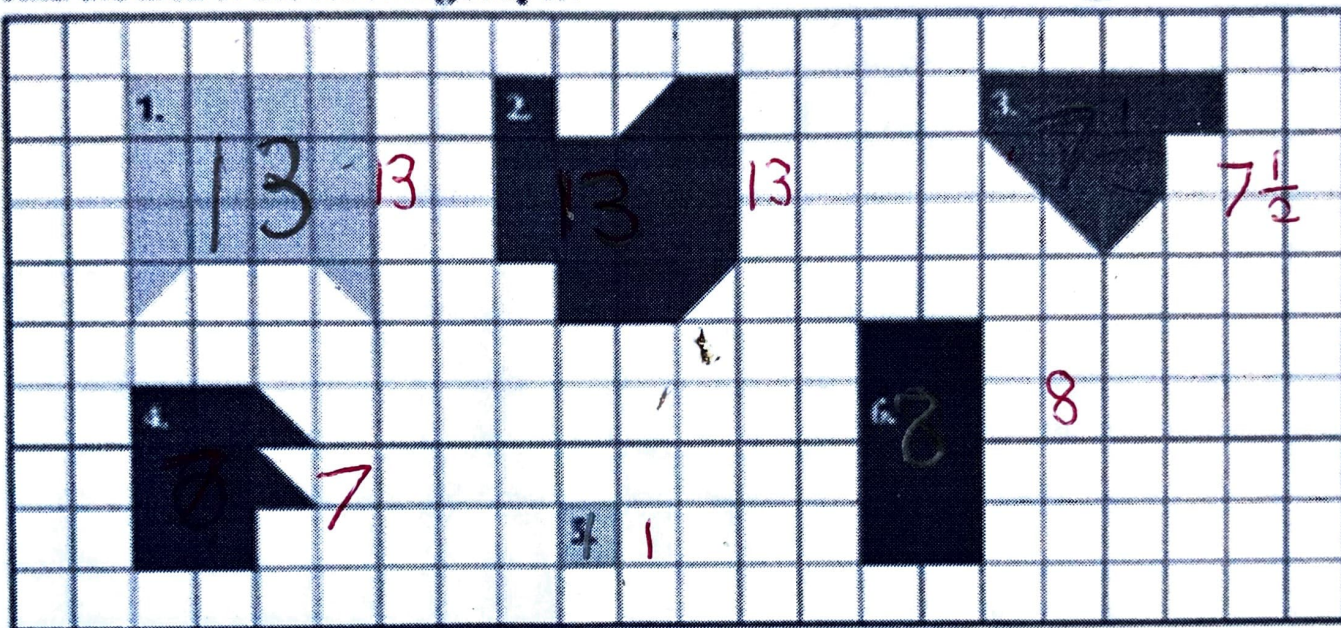


2

The area of the red shape is 22 squares.



A Find the area of the following shapes.



B Find the area of your hand.

Draw around your hand on the square paper as shown on the picture.

1. How many full squares can you count? **165**
2. How many $\frac{1}{2}$ squares can you count? **24**
3. Estimate the area of your hand. **60**
The area of my hand is **60** squares.
4. Count the area of your hand by counting the squares. **80**
(Remember, two $\frac{1}{2}$ squares add up to one full square.)

